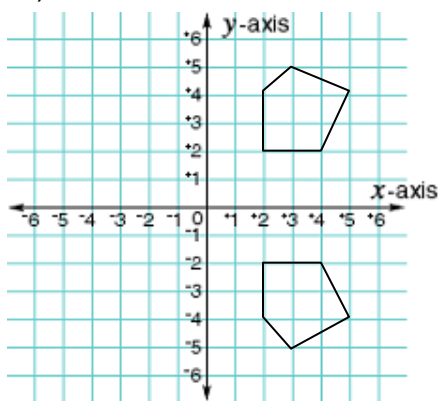




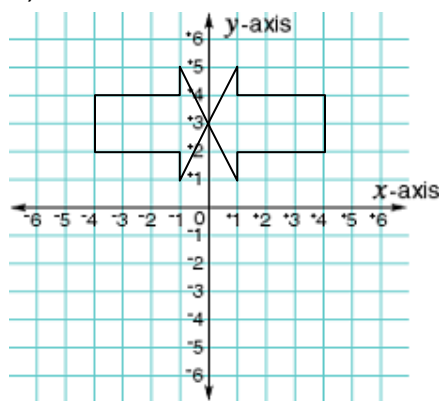
## Reflections and Symmetry (page 1)

**I. A reflection is a transformation in which a figure is reflected, or flipped, over a line, called the line of reflection. Tell whether the transformation is a reflection. If so, identify the line of reflection.**

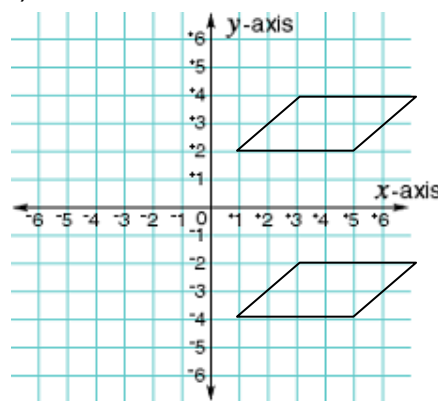
1)



2)



3)



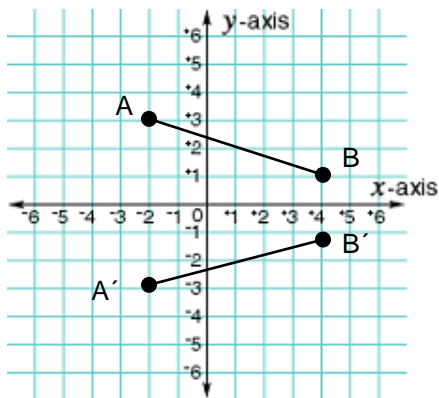
**II. You can use coordinate notation to describe the images of figures after reflections. Find the coordinates of A, B, A', and B' in both examples. Use this information to write the coordinate notation for**

a reflection in the *x*-axis

and

a reflection in the *y*-axis.

1)

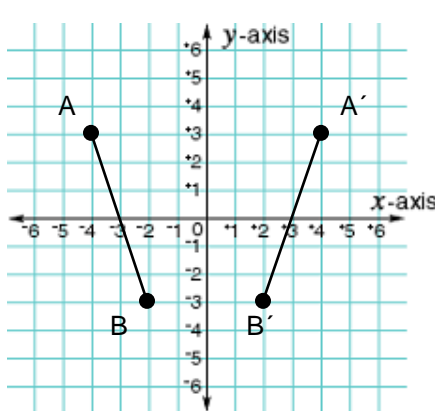


$$A( -2, 3 ) \rightarrow A'( -2, -3 )$$

$$B( 4, 1 ) \rightarrow B'( 4, -1 )$$

$$(x, y) \rightarrow ( x, -y )$$

2)



$$A( -4, 3 ) \rightarrow A'( 4, 3 )$$

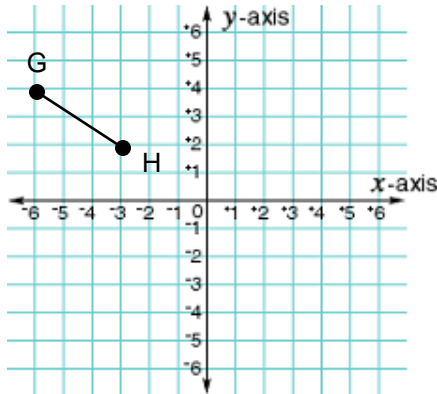
$$B( -2, -3 ) \rightarrow B'( 2, -3 )$$

$$(x, y) \rightarrow ( -x, y )$$

## Reflections and Symmetry (page 2)

III. An object can be transformed several times and in more than one way.

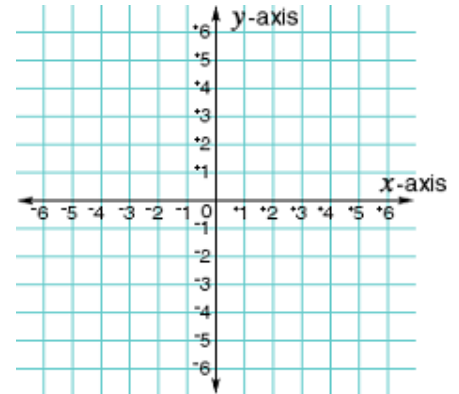
1) What are the coordinates of  $G'$  and  $H'$  after  $\overline{GH}$  is reflected across the  $y$ -axis? Draw and label the image  $\overline{G'H'}$ .



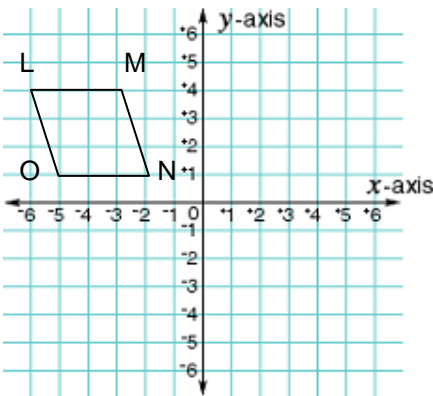
$G' ( \quad , \quad )$   
 $H' ( \quad , \quad )$

2) What are the coordinates of  $A'$ ,  $B'$  and  $C'$  after  $A$ ,  $B$  and  $C$  are reflected across the  $x$ -axis? Draw the figure and image.

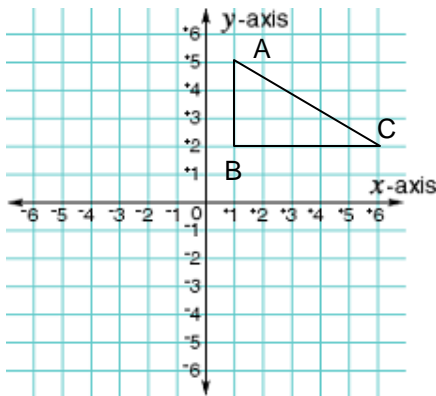
$(x, y) \rightarrow ( \quad , \quad )$   
 $A ( 1, -1 ) \rightarrow A' ( \quad , \quad )$   
 $B ( 3, 2 ) \rightarrow B' ( \quad , \quad )$   
 $C ( 4, -3 ) \rightarrow C' ( \quad , \quad )$



3) Reflect the polygon over the  $x$ -axis, then translate using  $(x, y) \rightarrow (x + 8, y + 4)$ .



4) Reflect the polygon over the  $y$ -axis, then translate the image using  $(x, y) \rightarrow (x + 1, y - 5)$ .



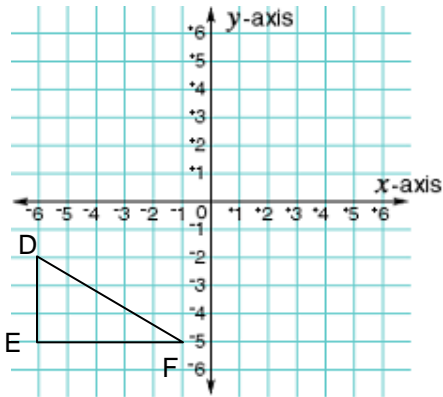
IV. A figure has line symmetry if a line, called the line of symmetry, divides the figure into two parts that are reflections of each other in the line. A figure may have more than one line of symmetry. Tell how many lines of symmetry the following flags have. If they have symmetry, draw the line or lines of symmetry.



## Reflections and Symmetry (page 3)

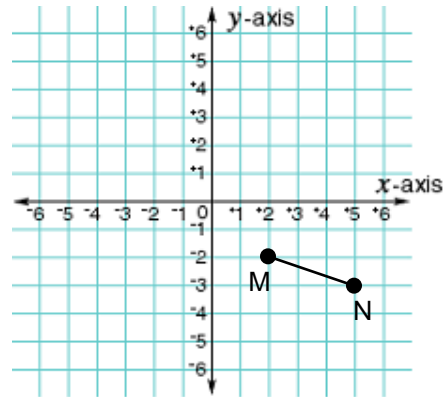
1) Describe a reflection in one word.

2) What are the coordinates of  $D'$ ,  $E'$ , and  $F'$  after  $D$ ,  $E$ , and  $F$  are reflected across the  $y$ -axis? Draw the image.



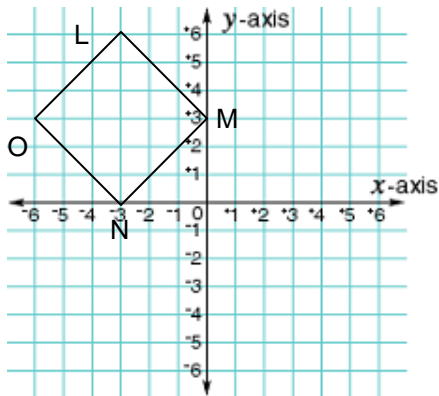
$$\begin{aligned} D( \quad , \quad ) &\rightarrow D'( \quad , \quad ) \\ E( \quad , \quad ) &\rightarrow E'( \quad , \quad ) \\ F( \quad , \quad ) &\rightarrow F'( \quad , \quad ) \end{aligned}$$

3) What are the coordinates of  $M'$  and  $N'$  after  $\overline{MN}$  is reflected across the  $x$ -axis? Draw the image.



$$\begin{aligned} M( \quad , \quad ) &\rightarrow M'( \quad , \quad ) \\ N( \quad , \quad ) &\rightarrow N'( \quad , \quad ) \end{aligned}$$

4) Reflect the polygon in the  $x$ -axis, then translate using  $(x, y) \rightarrow (x + 6, y - 1)$ .



5) Tell how many lines of symmetry the square below has. Draw them.

