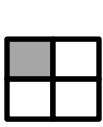


Name \_\_\_\_\_ Date \_\_\_\_\_

3.NF.1

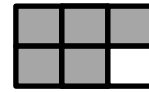
Write the fraction for the part that is shaded.




—



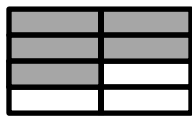
—



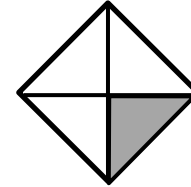
—



—




—




—

Draw lines and shade to model the given fraction.

$\frac{3}{8}$
---------------



$\frac{1}{4}$
---------------



$\frac{2}{3}$
---------------



$\frac{5}{6}$
---------------



Show the meaning of the fraction,  $\frac{3}{4}$  in two different ways.

--

--