



Name _____ Date _____

1.NBT.5

1. What is ten less and ten more than each number?

Ten less		Ten more
	34	
	17	
	87	
	60	
	58	

Ten less		Ten more
	49	
	75	
	82	
	26	
	44	

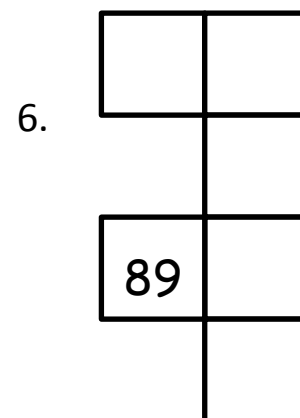
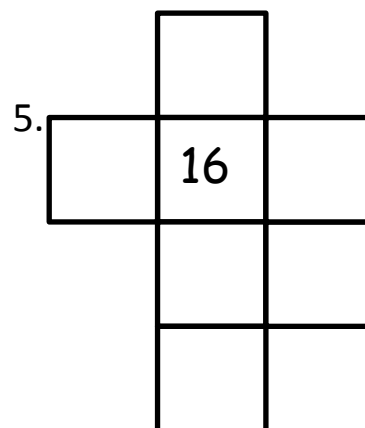
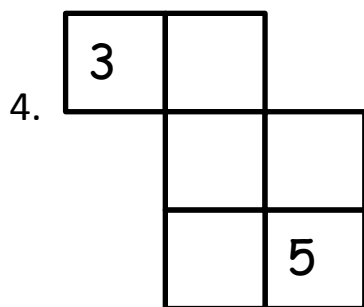
2. Circle the number below that is 10 **more** than 56.

57 66 46 146

3. Circle the number below that is 10 **less** than 24.

14 23 34 25

Use what you know about a hundred chart to fill in the missing numbers.



7. Use your understanding of place value to explain to a new student how you know what ten more and ten less than 47 is. Use models, numbers, or words.