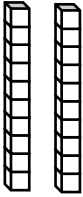
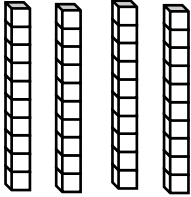
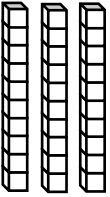
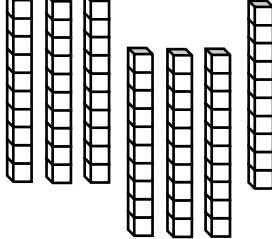
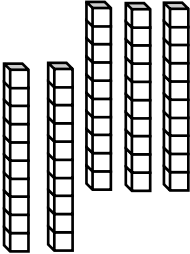
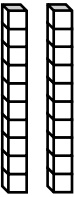
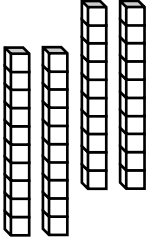
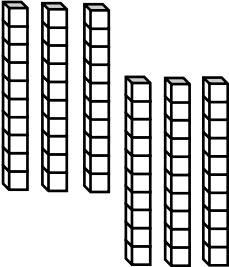
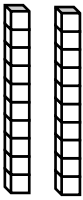
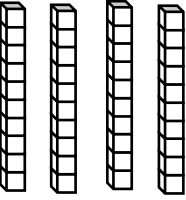


Name _____ Date _____

Adding Multiples of 10: Partial Model

<p>1. $36 +$  $=$ _____</p>	<p>2. $29 +$  $=$ _____</p>
<p>3.  $+ 64 =$ _____</p>	<p>4. $15 +$  $=$ _____</p>
<p>5. $17 +$  $=$ _____</p>	<p>6.  $+ 44 =$ _____</p>
<p>7.  $+ 37 =$ _____</p>	<p>8. $24 +$  $=$ _____</p>
<p>9. $55 +$  $=$ _____</p>	<p>10.  $+ 60 =$ _____</p>