



Name \_\_\_\_\_ Date \_\_\_\_\_


Circle groups of tens. Record how many 10s and 1s.




\_\_\_\_\_ tens and \_\_\_\_\_ ones = \_\_\_\_\_




\_\_\_\_\_ tens and \_\_\_\_\_ ones = \_\_\_\_\_




\_\_\_\_\_ tens and \_\_\_\_\_ ones = \_\_\_\_\_



\_\_\_\_\_ tens and \_\_\_\_\_ ones = \_\_\_\_\_



\_\_\_\_\_ tens and \_\_\_\_\_ ones = \_\_\_\_\_



\_\_\_\_\_ tens and \_\_\_\_\_ ones = \_\_\_\_\_

On the back:

Draw a bunch of circles. Then make groups of tens and ones. Write how many.

Draw a bunch of triangles. Then make groups of tens and ones. Write how many.