




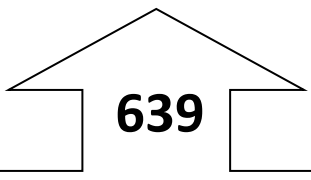
Name \_\_\_\_\_ Date \_\_\_\_\_

Add and Subtract 10 and 100 from each 3 digit number.

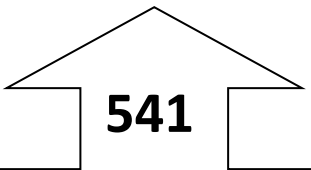
Example:



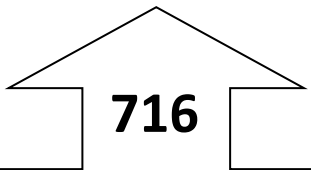
Ten less	<u>124</u>
Ten more	<u>144</u>
Hundred less	<u>34</u>
Hundred more	<u>234</u>




Ten less	_____
Ten more	_____
Hundred less	_____
Hundred more	_____




Ten less	_____
Ten more	_____
Hundred less	_____
Hundred more	_____



Ten less	_____
Ten more	_____
Hundred less	_____
Hundred more	_____



Ten less	_____
Ten more	_____
Hundred less	_____
Hundred more	_____



Ten less	_____
Ten more	_____
Hundred less	_____
Hundred more	_____

**489**

Ten less \_\_\_\_\_

Ten more \_\_\_\_\_

Hundred less \_\_\_\_\_

Hundred more \_\_\_\_\_

**222**

Ten less \_\_\_\_\_

Ten more \_\_\_\_\_

Hundred less \_\_\_\_\_

Hundred more \_\_\_\_\_

**401**

Ten less \_\_\_\_\_

Ten more \_\_\_\_\_

Hundred less \_\_\_\_\_

Hundred more \_\_\_\_\_

**799**

Ten less \_\_\_\_\_

Ten more \_\_\_\_\_

Hundred less \_\_\_\_\_

Hundred more \_\_\_\_\_

One answer is given. What are the rest?  
What number should be at the top?

Ten less **245** \_\_\_\_\_

Ten more \_\_\_\_\_

Hundred less \_\_\_\_\_

Hundred more \_\_\_\_\_

Ten less \_\_\_\_\_

Ten more \_\_\_\_\_

Hundred less **486** \_\_\_\_\_

Hundred more \_\_\_\_\_