



Name \_\_\_\_\_


Circle the groups that you first see. Then write an equation for the dot arrangement.




3 + 1 + 3 = 7




\_\_\_\_\_




\_\_\_\_\_




\_\_\_\_\_




\_\_\_\_\_




\_\_\_\_\_



\_\_\_\_\_



\_\_\_\_\_



\_\_\_\_\_

Draw your own dot card and write an equation to describe the arrangement.



\_\_\_\_\_