




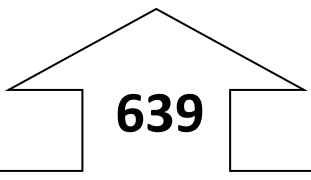
Name _____ Date _____

Add and Subtract 10 and 100 from each 3 digit number.

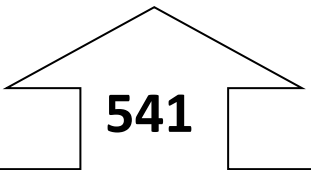
Example:



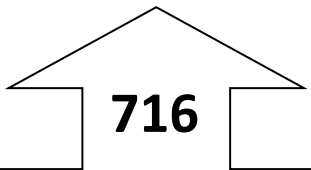
Ten less	<u>124</u>
Ten more	<u>144</u>
Hundred less	<u>34</u>
Hundred more	<u>234</u>




Ten less	_____
Ten more	_____
Hundred less	_____
Hundred more	_____




Ten less	_____
Ten more	_____
Hundred less	_____
Hundred more	_____



Ten less	_____
Ten more	_____
Hundred less	_____
Hundred more	_____



Ten less	_____
Ten more	_____
Hundred less	_____
Hundred more	_____



Ten less	_____
Ten more	_____
Hundred less	_____
Hundred more	_____

489

Ten less _____

Ten more _____

Hundred less _____

Hundred more _____

222

Ten less _____

Ten more _____

Hundred less _____

Hundred more _____

401

Ten less _____

Ten more _____

Hundred less _____

Hundred more _____

799

Ten less _____

Ten more _____

Hundred less _____

Hundred more _____

One answer is given. What are the rest?
What number should be at the top?

Ten less **245** _____

Ten more _____

Hundred less _____

Hundred more _____

Ten less _____

Ten more _____

Hundred less **486** _____

Hundred more _____