

Name: \_\_\_\_\_ Date: \_\_\_\_\_



NVACS: Domain 3.OA.2

Represent and solve problems

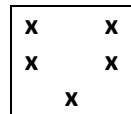
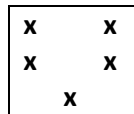
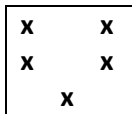
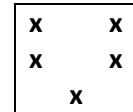
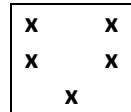
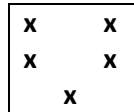
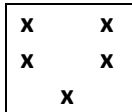
Division Problems

Practice for 3rd Grade

**Solve these problems. Write a word problem and make an illustration for each.**

Example:  $35 \div 7 = 5$

There are 35 students in our classroom. We have 7 tables.  
How many students can sit at each table?



1)  $25 \div 5$  \_\_\_\_\_

2)  $49 \div 7$  \_\_\_\_\_

Name: \_\_\_\_\_ Date: \_\_\_\_\_



NVACS: Domain 3.OA.2

Represent and solve problems

Division Problems

Practice for 3rd Grade

3)  $7 \div 7 =$  \_\_\_\_\_

4)  $36 \div 6 =$  \_\_\_\_\_

5)  $15 \div 5 =$  \_\_\_\_\_