

Name: _____ Date: _____




NVACS: Domain: Fractions 3.MD.7


Find Area by Decomposing into Smaller Rectangles

Constructed Response Assessment for 3rd Grade

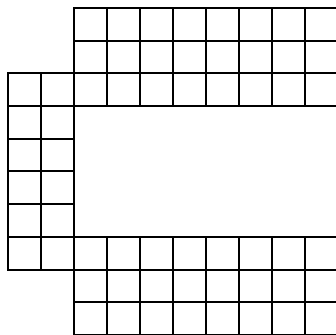
Find the area of each region. Show your work, describe your thinking.



_____ square units



_____ square units



_____ square units