

Name: _____ Date: _____




NVACS: Domain: Measurement and Data 3.MD.8

Area/Perimeter

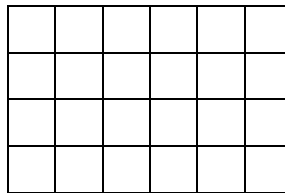
Constructed Response Assessment for 3rd Grade

Ms. Garcia is shopping for a new rug. She compared the size of Rugs A, B, and C.

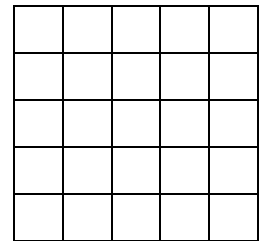
A



B



C



A) Which two rugs have the same perimeter? Show your work and explain your thinking.

B) Which rug will cover the largest area? Show your work and explain your thinking.