

Name: \_\_\_\_\_ Date: \_\_\_\_\_




NVACS: Domain: Fractions 3.NF.1

### Compare Fractions

### Constructed Response Assessment for 3<sup>rd</sup> Grade


Compare fractions. Use the symbols  $<$ ,  $=$ ,  $>$ . Show your work using rectangular model or a number line.

1)  $\frac{2}{6}$  ○  $\frac{4}{6}$





2)  $\frac{3}{3}$  ○  $\frac{2}{3}$

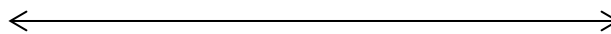
--	--	--



3)  $\frac{6}{8}$  ○  $\frac{7}{8}$

4)  $\frac{3}{4}$  ○  $\frac{1}{4}$

5)  $\frac{5}{8}$  ○  $\frac{3}{8}$