

Name: _____ Date: _____

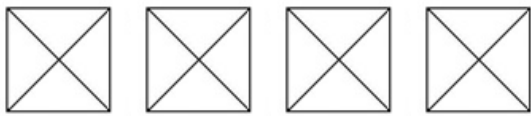


NVACS: Domain: Fractions 3.NF.1

Understand Fractions

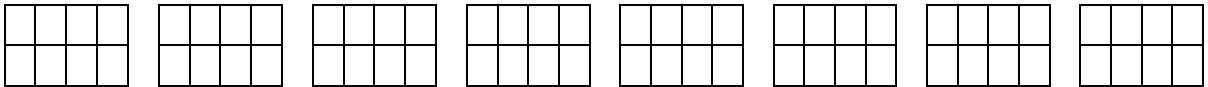
Constructed Response Assessment for 3rd Grade

1) Shade each of these fractions:




$\frac{1}{4}$ $\frac{2}{4}$ $\frac{3}{4}$ $\frac{4}{4}$

2) Shade each of these fractions:



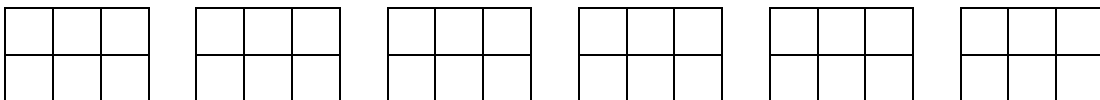
$\frac{1}{8}$ $\frac{4}{8}$ $\frac{3}{8}$ $\frac{6}{8}$ $\frac{2}{8}$ $\frac{8}{8}$ $\frac{5}{8}$ $\frac{7}{8}$

3) Shade each of these fractions:



$\frac{3}{3}$ $\frac{1}{3}$ $\frac{2}{3}$

4) Shade each of these fractions:



$\frac{5}{6}$ $\frac{4}{6}$ $\frac{3}{6}$ $\frac{1}{6}$ $\frac{2}{6}$ $\frac{6}{6}$