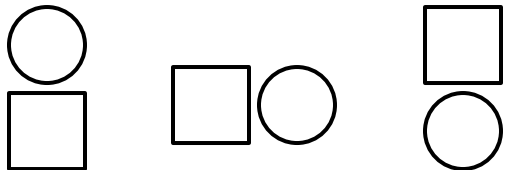
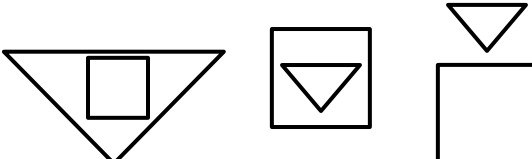
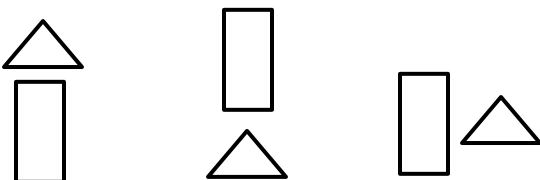
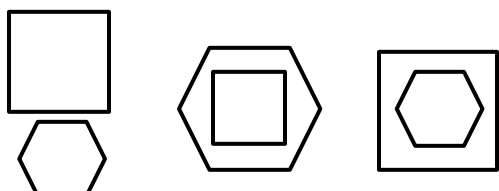
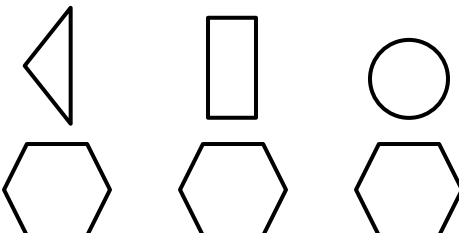


Name _____ Date _____

K.G.1 - Describe the relative positions of shapes using terms such as above, below, beside, in front of, behind, and next to.

Positional Words Assessment

Draw the shape and write how many sides and vertices.

<p>Circle the picture that shows a square below a circle.</p> 	<p>Circle the picture that shows a triangle inside a square.</p> 
<p>Circle the picture that shows a rectangle next to a triangle.</p> 	<p>Circle the picture that shows a square outside a hexagon.</p> 
<p>Circle the picture that shows a triangle above a hexagon.</p> 	<p>Circle the picture that shows a triangle next to a circle.</p> 