


Name \_\_\_\_\_ Date \_\_\_\_\_

K.OA. 1 and K.OA.2 - Uses objects, drawings or equations to solve addition and subtraction word problems.

Solve each problem by drawing a picture and writing an equation.


1. Emily saw 5 bugs.  
Then she saw 2 more.  
How many bugs now?

\_\_\_\_\_




2. There are 3 kids on the bus.  
2 more got on the bus.  
How many kids are on the bus now?

\_\_\_\_\_



3. Johnny found 3 pennies.  
Then he found 3 more.  
How many pennies now?

\_\_\_\_\_



4. Cassandra has 2 books.  
Steven has 4 books.  
How many books do they have?

\_\_\_\_\_



5. 4 planes were in the sky.  
3 more took off.  
How many planes in the sky now?

\_\_\_\_\_

