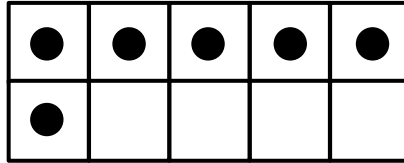



Name _____ Date _____

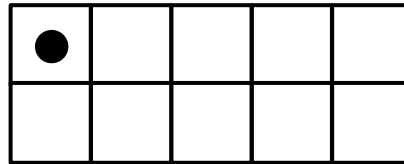

K.NBT - Work with numbers 11 – 19 to gain foundations for place value.

Ten Frame Assessment

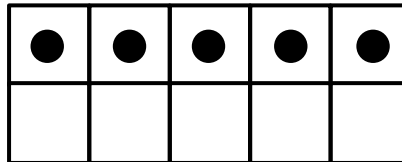
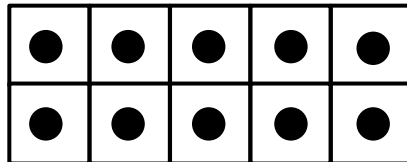
Add the dots on the ten frames together. Write the equation.



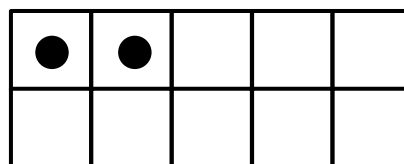

_____ + _____ = _____



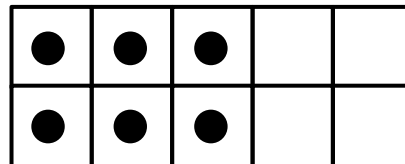

_____ + _____ = _____



_____ + _____ = _____



_____ + _____ = _____



_____ + _____ = _____