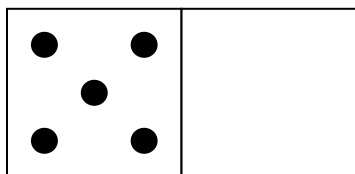


Name \_\_\_\_\_

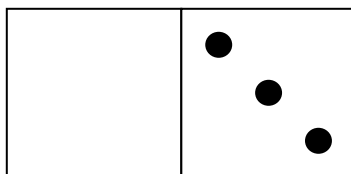


## Domino Math

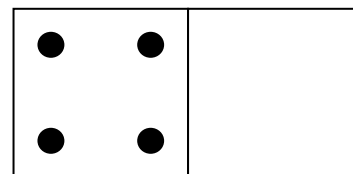
What's missing? Fill in the rest of the domino and complete the equation.



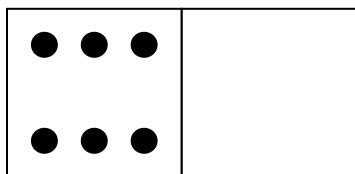
$$5 + \underline{\quad} = 9$$



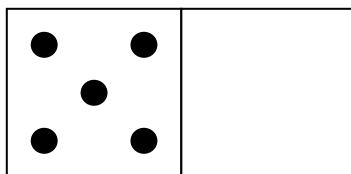
$$\underline{\quad} + 3 = 7$$



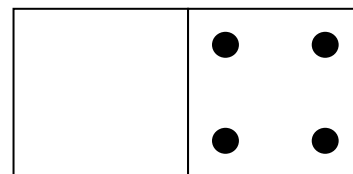
$$4 + \underline{\quad} = 8$$



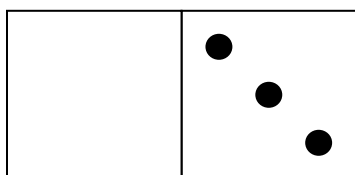
$$6 + \underline{\quad} = 8$$



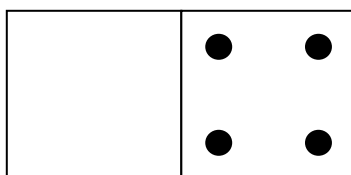
$$5 + \underline{\quad} = 7$$



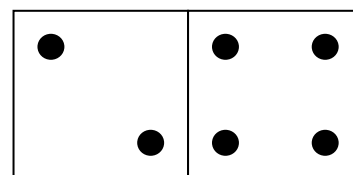
$$\underline{\quad} + 4 = 8$$



$$\underline{\quad} + 3 = 9$$




$$\underline{\quad} + 4 = 6$$



$$2 + \underline{\quad} = 7$$


Make your own dominos and write the equations.



$$\underline{\quad} + \underline{\quad} = 9$$



$$\underline{\quad} + \underline{\quad} = 6$$



$$\underline{\quad} + \underline{\quad} = 7$$