


Name \_\_\_\_\_ Date \_\_\_\_\_

## More and Less

1.

How many? \_\_\_\_\_



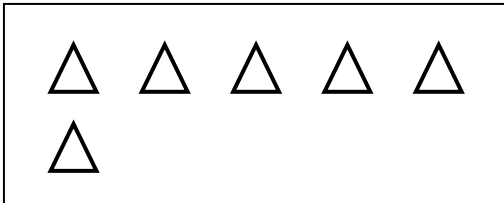
Draw a set that has **2 more**.

How many now? \_\_\_\_\_



2.

How many? \_\_\_\_\_



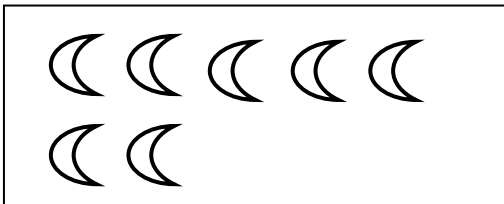
Draw a set that has **3 more**.

How many now? \_\_\_\_\_



3.

How many? \_\_\_\_\_




Draw a set that has **2 less**.

How many now? \_\_\_\_\_



4.

How many? \_\_\_\_\_



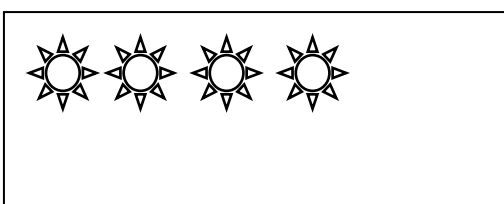
Draw a set that has **1 less**.

How many now? \_\_\_\_\_



5.

How many? \_\_\_\_\_



Draw a set that has **4 more**.

How many now? \_\_\_\_\_

