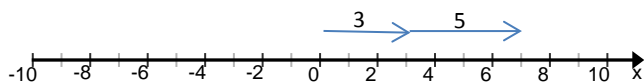




Name \_\_\_\_\_ Period \_\_\_\_\_ Date \_\_\_\_\_

## Adding Two Positives Integers on a Number Line

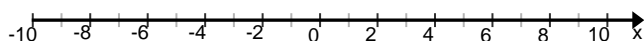
**Example:** Solve  $3 + 5 = \underline{\quad}$  using a number line.



$$3 + 5 = 8$$

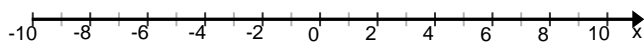
**1. Solve**  $3 + 2 = \underline{\quad}$  using a number line.

$$3 + 2 = \underline{\quad}$$



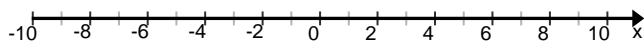
**2. Solve**  $5 + 5 = \underline{\quad}$  using a number line.

$$5 + 5 = \underline{\quad}$$



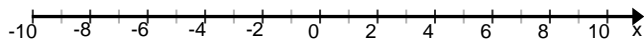
**3. Solve**  $4 + 1 = \underline{\quad}$  using a number line.

$$4 + 1 = \underline{\quad}$$



**4. Solve**  $6 + 3 = \underline{\quad}$  using a number line.

$$6 + 3 = \underline{\quad}$$



**5. Solve**  $5 + 2 = \underline{\quad}$  using a number line.

$$5 + 2 = \underline{\quad}$$

