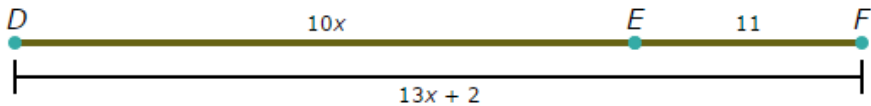
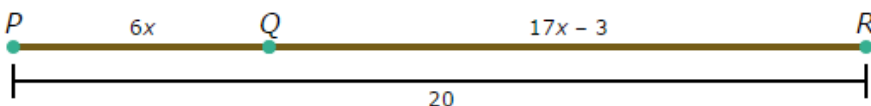
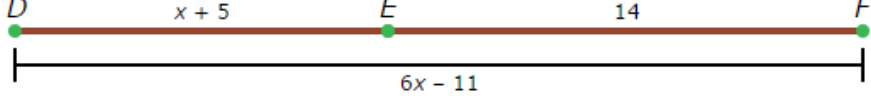
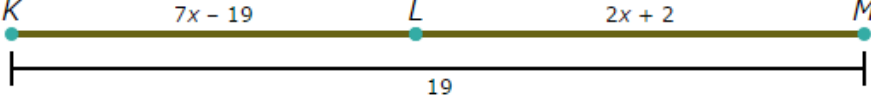




Finding Lengths

G.CO.A.1, G.CO.D.12

1)	<p>What is the length of \overline{DE}?</p>	
2)	<p>What is the length of \overline{DE}?</p>	
3)	<p>What is the length of \overline{FG}?</p>	
4)	<p>What is the length of \overline{DE}?</p>	
5)	<p>If $EF = 17$ and $FG = 13$, what is EG?</p>	
6)	<p>If $VW = 6$ and $UW = 19$, what is UV?</p>	
7)	<p>If $FG = 6.5$ and $GH = 8.7$, what is FH?</p>	
8)	<p>On a line segment, T is between S and U. If $ST = 6$ and $SU = 15$, what is TU?</p>	
9)	<p>L is a point on \overline{KM}. If $LM = 9$ and $KM = 14.8$, what is KL?</p>	
10)	<p>If $PQ = 5$, $QR = 5x$, and $PR = 10x$, what is PR?</p>	
11)	<p>If $DE = x + 5$, $EF = 8x$, and $DF = 14$, what is DE?</p>	
12)	<p>If $TU = 8x - 20$, $UV = 17$, and $TV = 5x + 15$, what is TV?</p>	



13)	 <p>If $DE = 10x$, $EF = 11$, and $DF = 13x + 2$, what is DE?</p>	
14)	 <p>If $PQ = 6x$, $QR = 17x - 3$, and $PR = 20$, what is PQ?</p>	
15)	 <p>If $DE = x + 5$, $EF = 14$, and $DF = 6x - 11$, what is DE?</p>	
16)	 <p>If $KL = 7x - 19$, $LM = 2x + 2$, and $KM = 19$, what is KL?</p>	
17)	 <p>If $DE = 4x$, $EF = 4$, and $DF = 5x + 2$, what is DF?</p>	
18)	 <p>If $DE = 2x - 3$, $EF = 3x - 4$, and $DF = x + 3$, what is DF?</p>	
19)	<p>On a line segment, T is between S and U. If $ST = 12$, $TU = 5x$, and $SU = 10x - 2$, what is SU?</p>	
20)	<p>L is a point on \overline{KM}. If $KL = 11x$, $LM = 10x - 8$, and $KM = 16x + 13$, what is KM?</p>	