

Geometry – Unit 1 Practice

Naming Angles

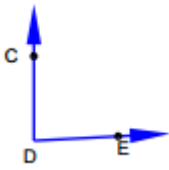
G.CO.A.1

Name: _____!

Date: _____ Pd: _____

1) Name the vertex and sides of the following angles:

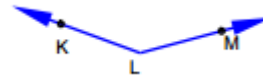
a)



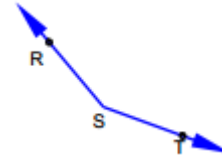
b)



c)

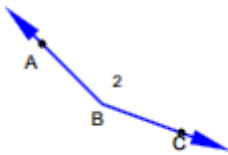


d)

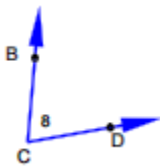


2) Name each angle in four ways:

a)



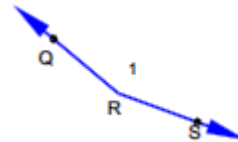
b)



c)

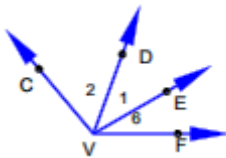


d)

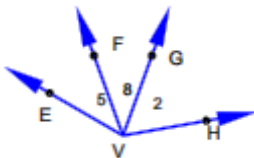


3) Name all angles in each diagram that have V as a vertex.

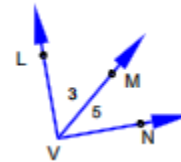
a)



b)



c)



d)

