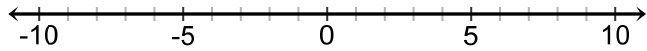




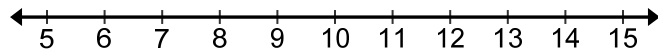
TWO-STEP INEQUALITIES WORKSHEET #2

Solve each inequality and graph its solution.

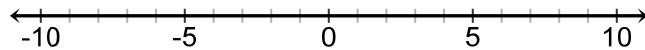
1. $-4(r-2) \leq 16$



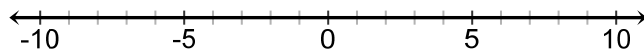
2. $-3 + \frac{v}{5} > -1$



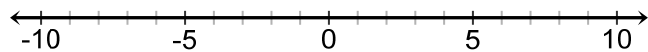
3. $3x - 5 \geq 7$



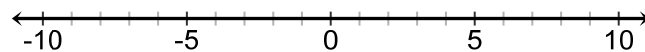
4. $-4 > 4b - 2b$



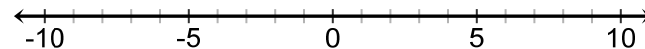
5. $-1 + 4y \geq -1$



6. $-5(x-1) < 20$



7. $-3 + \frac{r}{4} \leq -5$



8. $2(1+n) < -4$

