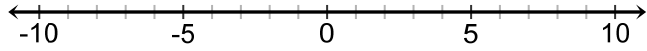




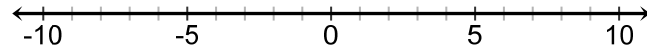
TWO-STEP INEQUALITIES WORKSHEET #1

Solve each inequality and graph its solution.

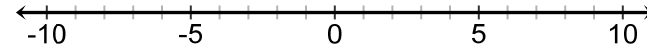
1. $5 - 3x > 14$



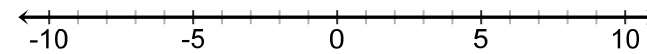
2. $4 + \frac{r}{6} \leq 5$



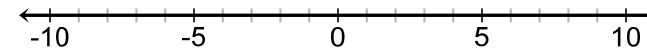
3. $2p - 1 \leq 3$



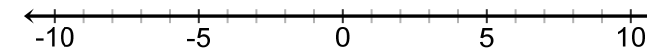
4. $\frac{b}{3} - 3 \geq -6$



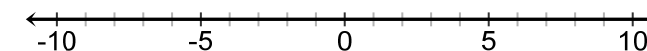
5. $-4(1 + x) \leq 12$



6. $5 + 4n \geq -7$



7. $-(x - 1) < 5$



8. $-4(x + 2) \leq 0$

