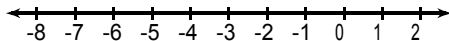




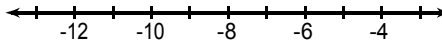
ONE-STEP INEQUALITIES WORKSHEET #2

Solve each inequality and graph its solution.

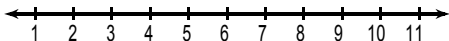
1) $x - 8 < -11$



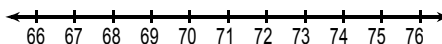
2) $k + 10 \geq 5$



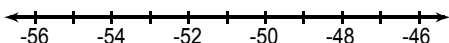
3) $p + 7 > 10$



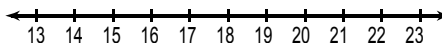
4) $\frac{b}{10} \geq 7$



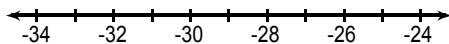
5) $\frac{m}{8} > -6$



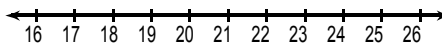
6) $320 < 20r$



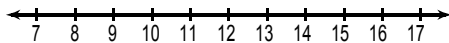
7) $-14 \geq a + 13$



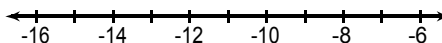
8) $15 + a \geq 34$



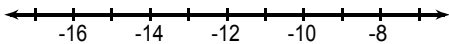
9) $-240 \leq -16r$



10) $\frac{x}{3} \geq -3$



11) $-28a \leq 420$



12) $x - 3 < -26$

