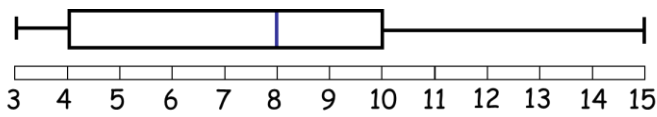
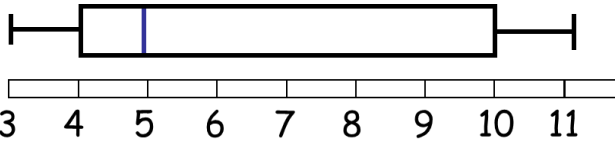


|          |
|----------|
| Answer   |
| 157      |
| Question |

|          |
|----------|
| Answer   |
| 8        |
| Question |

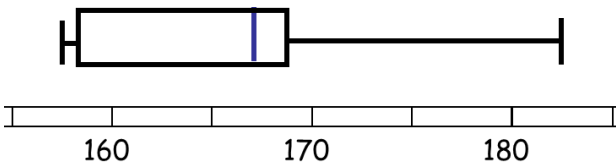
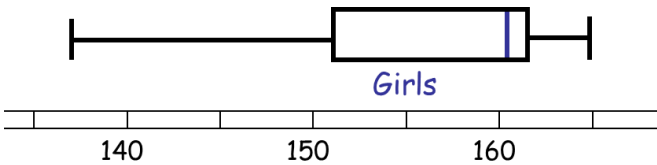


What is the range?

What is the lower quartile?

|          |
|----------|
| Answer   |
| 4        |
| Question |

|          |
|----------|
| Answer   |
| 137      |
| Question |



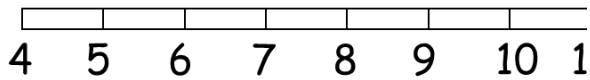
What was the lowest record?

What is the range?

Answer

25

Question

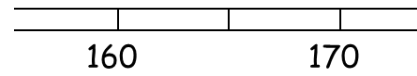


What is the interquartile range?

Answer

3.5

Question

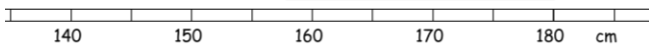


What is the median?

Answer

160

Question

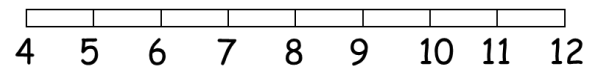


What is the upper quartile?

Answer

180

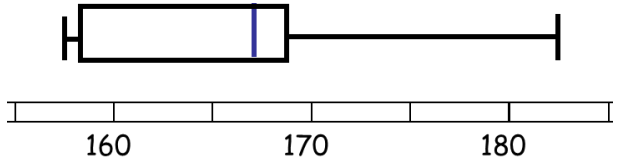
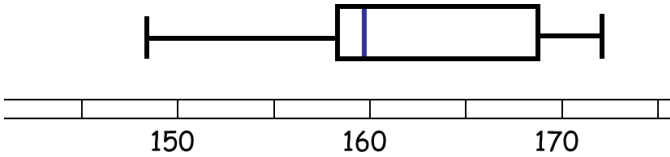
Question



What is the upper quartile?

|          |
|----------|
| Answer   |
| 9        |
| Question |

|          |
|----------|
| Answer   |
| 10       |
| Question |

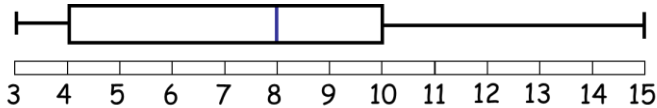
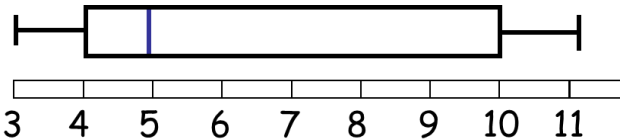


What is the interquartile range?

What is the lowest value?

|          |
|----------|
| Answer   |
| 183      |
| Question |

|          |
|----------|
| Answer   |
| 6        |
| Question |



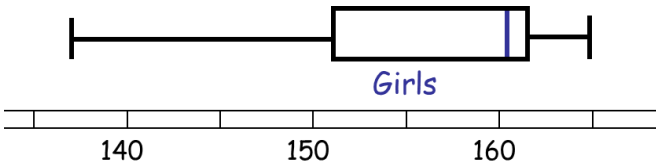
What is the interquartile range?

What is the range?

Answer

12

Question

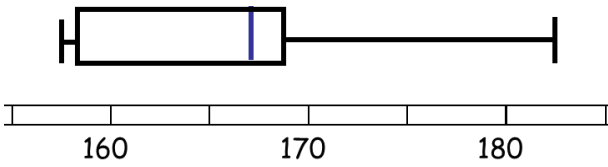


Is the box plot positively or negatively skewed?

Answer

Negative Skew

Question

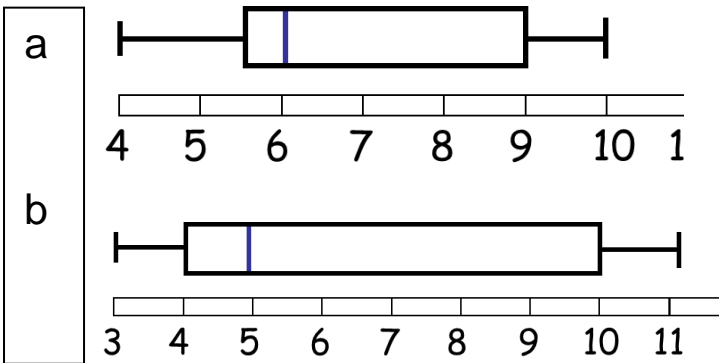


Is the box plot positively or negatively skewed?

Answer

Positive Skew

Question

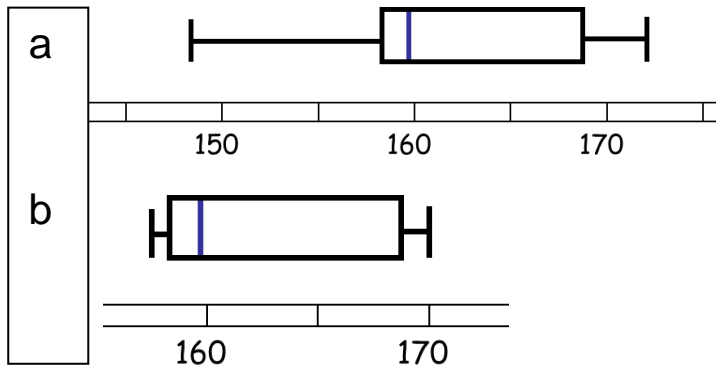


Which box plot shows more consistent results?

Answer

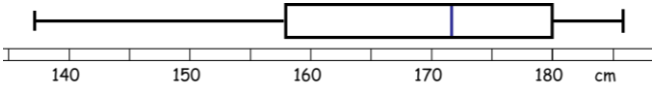
a

Question



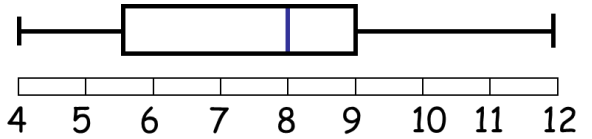
Which box plot shows more consistent results?

|          |
|----------|
| Answer   |
| b        |
| Question |



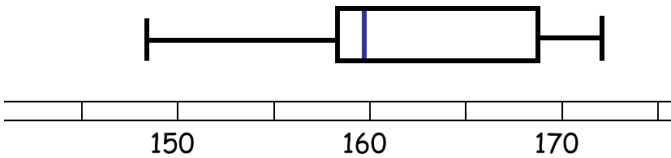
What is the median?

|          |
|----------|
| Answer   |
| 172      |
| Question |



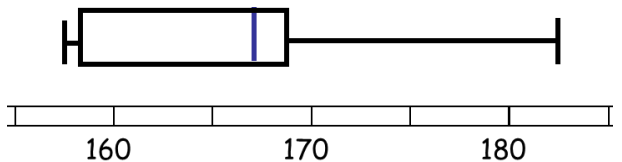
What is the range?

|          |
|----------|
| Answer   |
| 3.5      |
| Question |



What is the median?

|          |
|----------|
| Answer   |
| 160      |
| Question |



What is the highest value?