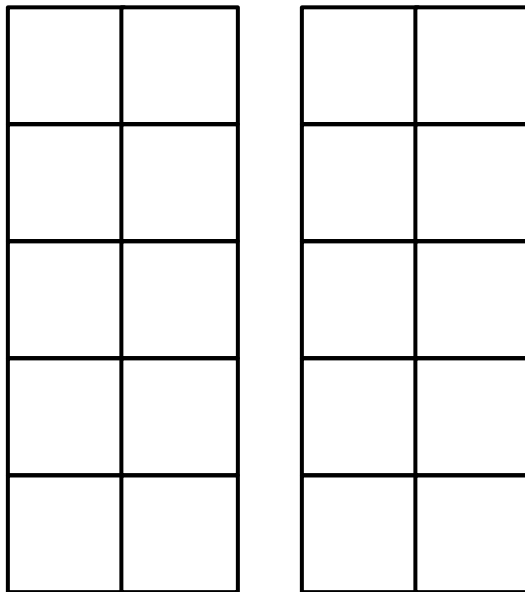


Name _____

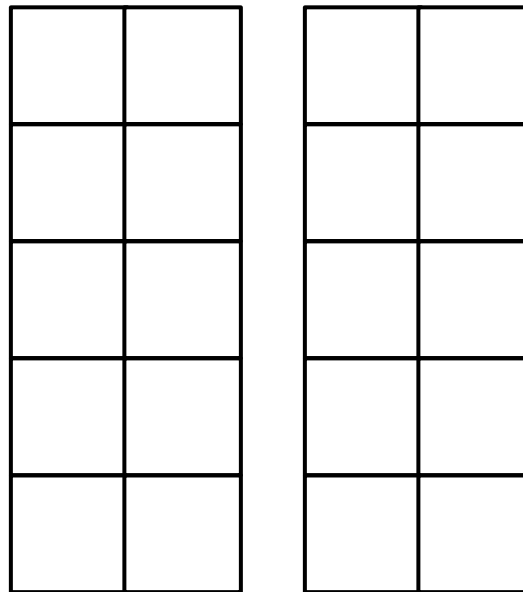
Choose a number and circle it. Say the number. Show the quantity on the ten frames.

11	12	13	14	15
16	17	18	19	



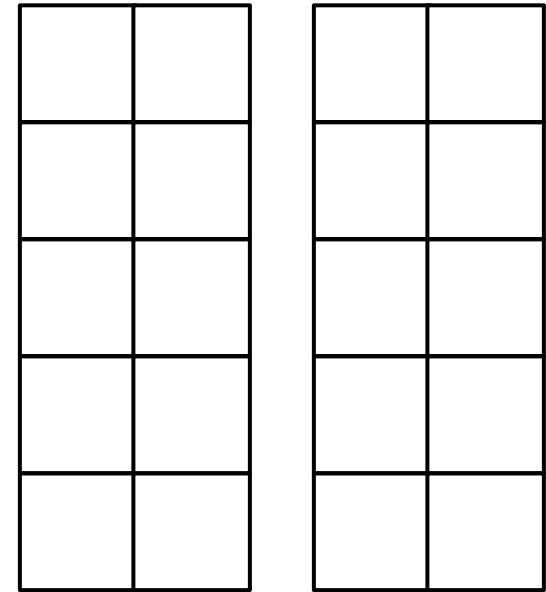
$$10 + \underline{\quad} = \underline{\quad}$$

11	12	13	14	15
16	17	18	19	



$$10 + \underline{\quad} = \underline{\quad}$$

11	12	13	14	15
16	17	18	19	



$$10 + \underline{\quad} = \underline{\quad}$$