

# Identifying 3-Dimensional Shapes

~ 1 ~

1. Describe the difference between a prism and a pyramid.

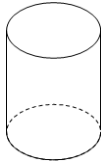
2. Complete this analogy:

A pyramid is to a prism as a cone is to a \_\_\_\_\_.

**Match the figures with their names. (3-12)**

\_\_\_3. Triangular Prism

a)



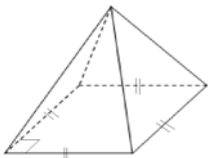
\_\_\_4. Triangular Pyramid

b)



\_\_\_5. Square Prism

c)



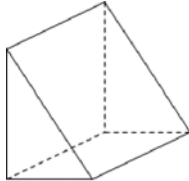
\_\_\_6. Square Pyramid

d)



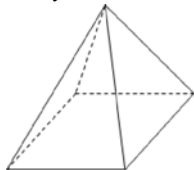
\_\_\_7. Cylinder

e)

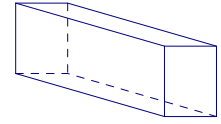


\_\_\_8. Cone

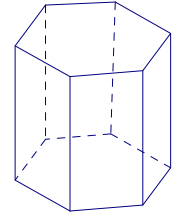
f)



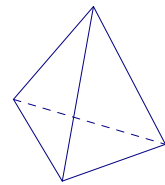
\_\_\_9. Rectangular Prism g)



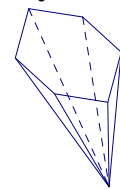
\_\_\_10. Rectangular Pyramid h)



\_\_\_11. Hexagonal Prism i)

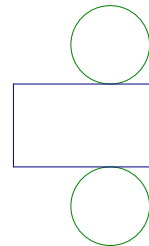


\_\_\_12. Hexagonal Pyramid j)

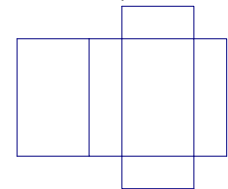


**Match these "nets" to their solid name. (13-18)**

\_\_\_13. Triangular Pyramid a)



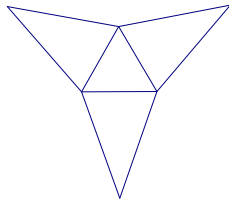
\_\_\_14. Cube b)



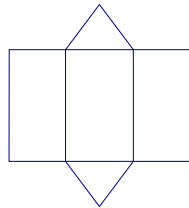
# Identifying 3-Dimensional Shapes

~ 2 ~

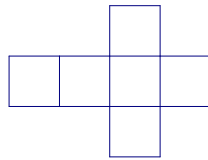
\_\_\_15. Triangular Prism c)



\_\_\_16. Cylinder d)



\_\_\_17. Rectangular Prism e)



\_\_\_18. Cone f)

